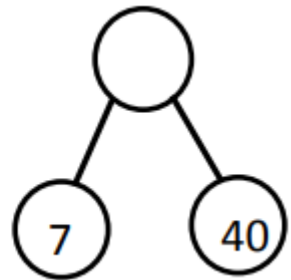
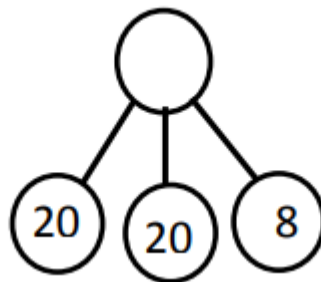
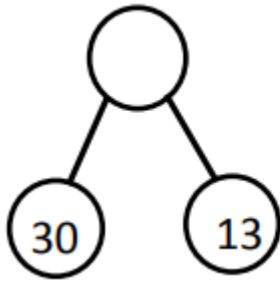


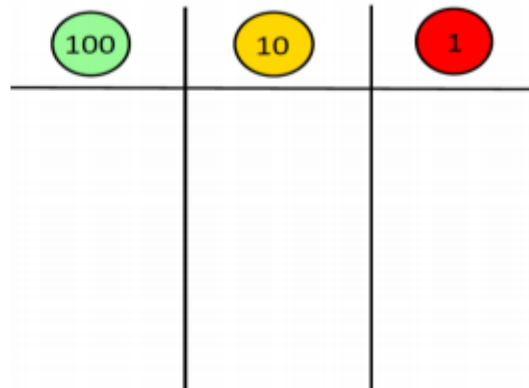
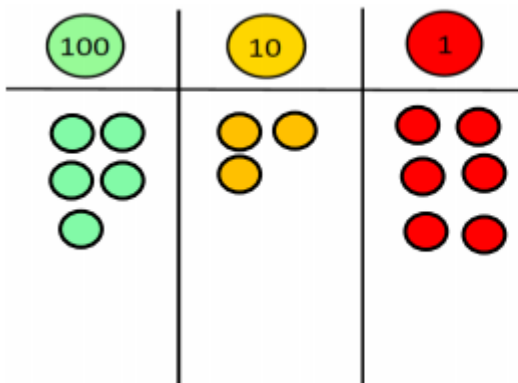
Maths challenges - W.B. 25.1.21

Monday

Which part - whole model shows the least value?



Tuesday



Show a number on the blank grid which is less than the number shown here but greater than 100.

Can you find 6 different numbers?

Can you put these numbers in order from smallest to largest?

Wednesday

Use these digit cards to make the following numbers:



- Use 2 cards to make a number greater than 60.
- Use 2 cards to make a number less than 40.
- What is the smallest two - digit number you can make?
- What is the largest 3 digit number you can make?

Thursday



One more than 24
is the same as one
less than 27.

True or false? Explain your answer.

Friday

True or false?

Four tens and fourteen ones is greater than five tens.

Explain your answer using your dienes and ones.