



# North and South Before the Civil War

## Activity 1



*AYC&M Academic Series: Juanita Pritchard/DTA Schools*



Attribution-NonCommercial-NoDerivatives 4.0  
International (CC BY-NC-ND 4.0)


Name \_\_\_\_\_

Date \_\_\_\_\_

Use the map to answer these questions:

1. Which letter shows the Northern part of the United States in 1860?

A. 

B. 

C. 

2. Which letter shows the Northern part of the United States in 1860?

A. 


B. 

C. 



3. Which picture shows where industry is on the map?



4. Which picture shows where most of the population lives on the map?



5. Which picture shows where most of the farms are on the map?



# Map for Activity 1

